



UNIVERSITY OF CAMBRIDGE INTERNATIONAL EXAMINATIONS
General Certificate of Education
Advanced Subsidiary Level and Advanced Level

MATHEMATICS

9709/41

Paper 4 Mechanics 1 (M1)

May/June 2012

1 hour 15 minutes

Additional Materials: Answer Booklet/Paper
Graph Paper
List of Formulae (MF9)



READ THESE INSTRUCTIONS FIRST

If you have been given an Answer Booklet, follow the instructions on the front cover of the Booklet.

Write your Centre number, candidate number and name on all the work you hand in.

Write in dark blue or black pen.

You may use a soft pencil for any diagrams or graphs.

Do not use staples, paper clips, highlighters, glue or correction fluid.

Answer **all** the questions.

Give non-exact numerical answers correct to 3 significant figures, or 1 decimal place in the case of angles in degrees, unless a different level of accuracy is specified in the question.

Where a numerical value for the acceleration due to gravity is needed, use 10 m s^{-2} .

The use of an electronic calculator is expected, where appropriate.

You are reminded of the need for clear presentation in your answers.

At the end of the examination, fasten all your work securely together.

The number of marks is given in brackets [] at the end of each question or part question.

The total number of marks for this paper is 50.

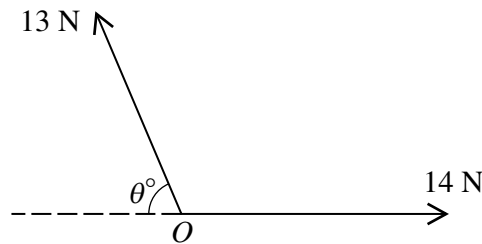
Questions carrying smaller numbers of marks are printed earlier in the paper, and questions carrying larger numbers of marks later in the paper.

This document consists of **4** printed pages.



- 1 A car of mass 880 kg travels along a straight horizontal road with its engine working at a constant rate of P W. The resistance to motion is 700 N. At an instant when the car's speed is 16 m s^{-1} its acceleration is 0.625 m s^{-2} . Find the value of P . [4]

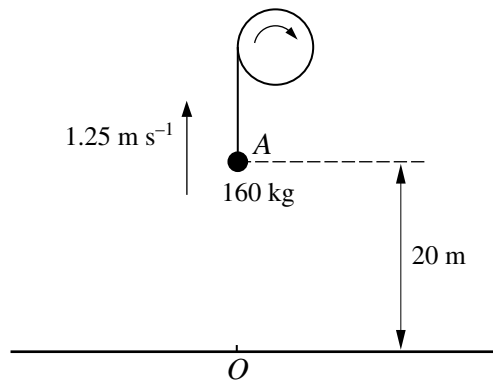
2



Forces of magnitudes 13 N and 14 N act at a point O in the directions shown in the diagram. The resultant of these forces has magnitude 15 N. Find

- (i) the value of θ , [3]
(ii) the component of the resultant in the direction of the force of magnitude 14 N. [2]

3



A load of mass 160 kg is pulled vertically upwards, from rest at a fixed point O on the ground, using a winding drum. The load passes through a point A , 20 m above O , with a speed of 1.25 m s^{-1} (see diagram). Find, for the motion from O to A ,

- (i) the gain in the potential energy of the load, [1]
(ii) the gain in the kinetic energy of the load. [2]

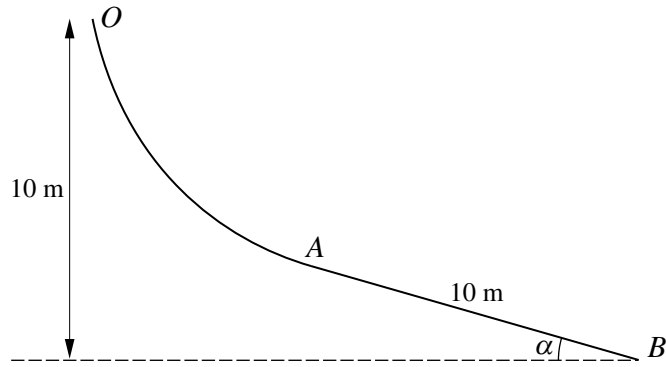
The power output of the winding drum is constant while the load is in motion.

- (iii) Given that the work done against the resistance to motion from O to A is 20 kJ and that the time taken for the load to travel from O to A is 41.7 s, find the power output of the winding drum. [3]

- 4 A particle P starts at the point O and travels in a straight line. At time t seconds after leaving O the velocity of P is $v \text{ m s}^{-1}$, where $v = 0.75t^2 - 0.0625t^3$. Find

- (i) the positive value of t for which the acceleration is zero, [3]
(ii) the distance travelled by P before it changes its direction of motion. [5]

5



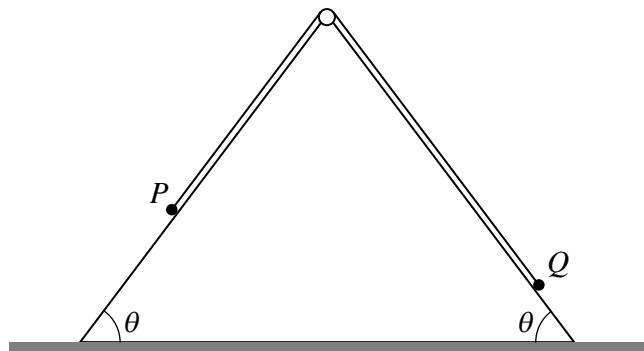
The diagram shows the vertical cross-section OAB of a slide. The straight line AB is tangential to the curve OA at A . The line AB is inclined at α to the horizontal, where $\sin \alpha = 0.28$. The point O is 10 m higher than B , and AB has length 10 m (see diagram). The part of the slide containing the curve OA is smooth and the part containing AB is rough. A particle P of mass 2 kg is released from rest at O and moves down the slide.

- (i) Find the speed of P when it passes through A . [3]

The coefficient of friction between P and the part of the slide containing AB is $\frac{1}{12}$. Find

- (ii) the acceleration of P when it is moving from A to B , [3]
 (iii) the speed of P when it reaches B . [2]

6

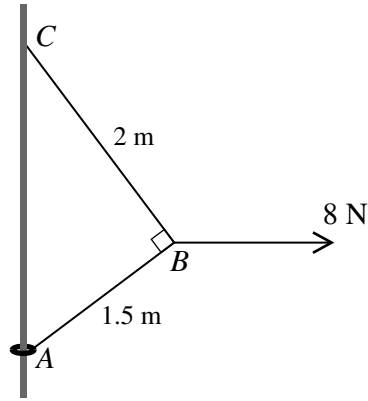


Particles P and Q , of masses 0.6 kg and 0.4 kg respectively, are attached to the ends of a light inextensible string. The string passes over a small smooth pulley which is fixed at the top of a vertical cross-section of a triangular prism. The base of the prism is fixed on horizontal ground and each of the sloping sides is smooth. Each sloping side makes an angle θ with the ground, where $\sin \theta = 0.8$. Initially the particles are held at rest on the sloping sides, with the string taut (see diagram). The particles are released and move along lines of greatest slope.

- (i) Find the tension in the string and the acceleration of the particles while both are moving. [5]

The speed of P when it reaches the ground is 2 m s^{-1} . On reaching the ground P comes to rest and remains at rest. Q continues to move up the slope but does not reach the pulley.

- (ii) Find the time taken from the instant that the particles are released until Q reaches its greatest height above the ground. [4]



A small ring of mass 0.2 kg is threaded on a fixed vertical rod. The end A of a light inextensible string is attached to the ring. The other end C of the string is attached to a fixed point of the rod above A . A horizontal force of magnitude 8 N is applied to the point B of the string, where $AB = 1.5 \text{ m}$ and $BC = 2 \text{ m}$. The system is in equilibrium with the string taut and AB at right angles to BC (see diagram).

- (i) Find the tension in the part AB of the string and the tension in the part BC of the string. [5]

The equilibrium is limiting with the ring on the point of sliding up the rod.

- (ii) Find the coefficient of friction between the ring and the rod. [5]

Permission to reproduce items where third-party owned material protected by copyright is included has been sought and cleared where possible. Every reasonable effort has been made by the publisher (UCLES) to trace copyright holders, but if any items requiring clearance have unwittingly been included, the publisher will be pleased to make amends at the earliest possible opportunity.

University of Cambridge International Examinations is part of the Cambridge Assessment Group. Cambridge Assessment is the brand name of University of Cambridge Local Examinations Syndicate (UCLES), which is itself a department of the University of Cambridge.